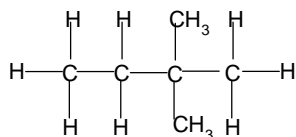


MEGA LECTURE

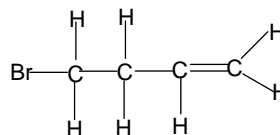
TOPIC 7 EXERCISE 2 - Nomenclature of organic compounds

1. Name the following compounds:

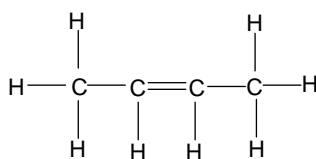
a)



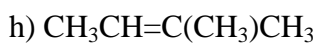
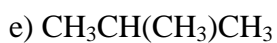
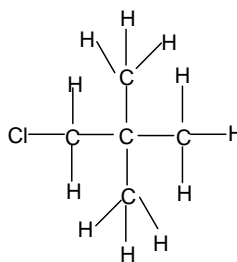
b)



c)



d)



2. Draw the structures of the following compounds:

a) methylbutane

b) cyclohexane

c) but-1-ene

d) 3-ethyl,2-methylhex-1-ene

e) 3-chlorobut-1-ene

f) 1,1-dichloropropane

g) 2,2,4-trimethylheptane

h) pent-2-ene